

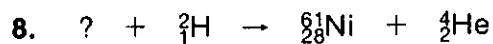
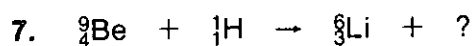
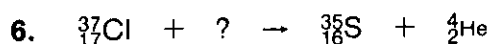
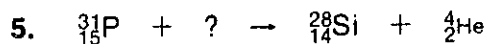
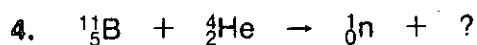
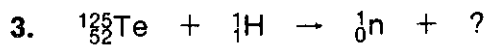
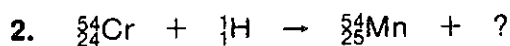
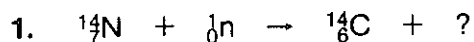
NAME \_\_\_\_\_ DATE \_\_\_\_\_

# Nuclear Equations

## Practice Problems (Level 1)

---

Balance each of the nuclear equations shown below by determining the missing particle in each case.



NAME \_\_\_\_\_ DATE \_\_\_\_\_

# Nuclear Equations

## Practice Problems (Level 2)

---

Balance each of the nuclear equations shown below by determining the missing particle in each case.

