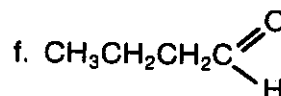
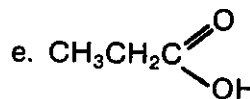
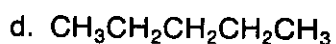
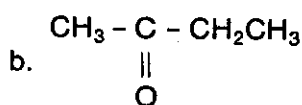
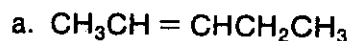


NAME _____ DATE _____

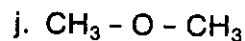
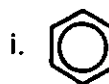
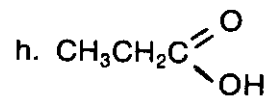
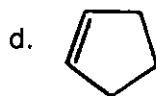
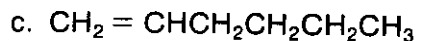
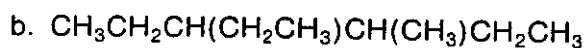
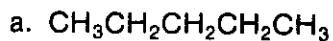
Organic Chemistry: Nomenclature

Practice Problems (Level 1)

1. Tell what family to which each of the following compounds belong. Identify the functional group in each compound.



2. Give the correct IUPAC name for each of the following compounds.



3. Write the correct structural formula for each of the following compounds.

